




Write each array as an addition problem and solve.



Answers

Ex. 3+3=6

1. _____

2. _____

3. _____

4. _____

5. _____

6. _____

7. _____

8. _____

9. _____

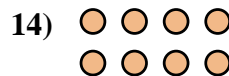
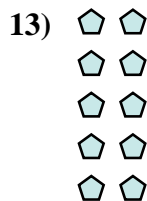

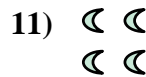



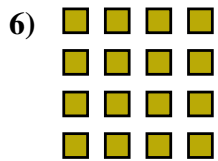
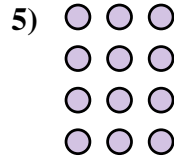

10. _____

11. _____

12. _____


13. _____

14. _____



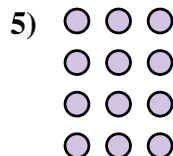


Write each array as an addition problem and solve.


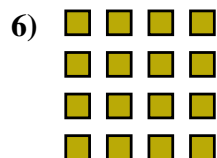


Answers

Ex. 3+3=6



1. 5+5+5=15



2. 3+3+3=9

3. 2+2+2=6

4. 5+5=10

5. 3+3+3+3=12

6. 4+4+4+4=16

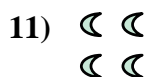


7. 3+3+3+3+3=15

8. 4+4+4=12

9. 5+5+5+5+5=25

10. 5+5+5+5=20

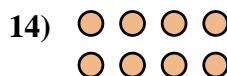
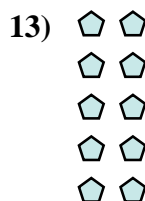

11. 2+2=4



12. 2+2+2+2=8



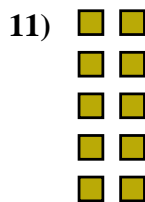





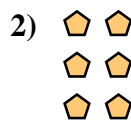
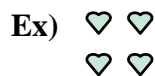
13. 2+2+2+2+2=10

14. 4+4=8





Write each array as an addition problem and solve.



Answers

Ex. $2+2=4$

1. _____

2. _____

3. _____

4. _____

5. _____

6. _____

7. _____

8. _____

9. _____

10. _____

11. _____

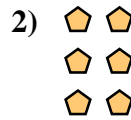
12. _____

13. _____

14. _____



Write each array as an addition problem and solve.



Answers

Ex. 2+2=4

1. 3+3+3=9

2. 2+2+2=6

3. 3+3=6

4. 3+3+3+3=12

5. 2+2+2+2=8

6. 4+4+4+4=16

7. 5+5+5=15

8. 4+4+4+4+4=20

9. 4+4=8


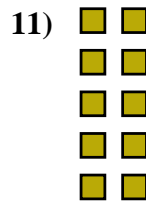




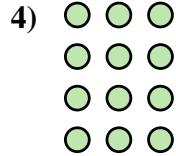
10. 5+5+5+5+5=25

11. 2+2+2+2+2=10

12. 5+5=10

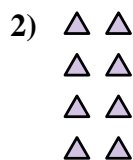
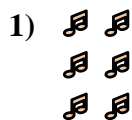
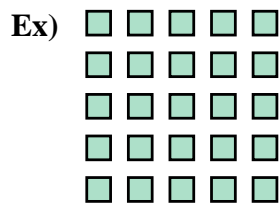
13. 3+3+3+3+3=15

14. 4+4+4=12





Write each array as an addition problem and solve.



Answers

Ex. 5+5+5+5+5=25

1. _____

2. _____

3. _____

4. _____

5. _____

6. _____

7. _____

8. _____

9. _____


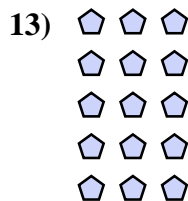
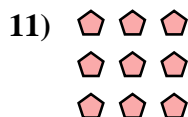
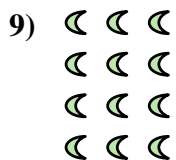



10. _____

11. _____

12. _____

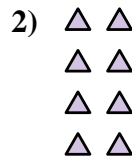
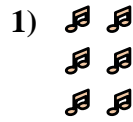
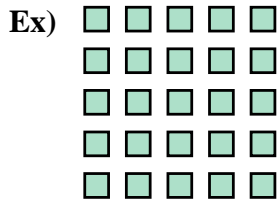
13. _____

14. _____





Write each array as an addition problem and solve.



Answers

Ex. $5+5+5+5+5=25$

1. $2+2+2=6$

2. $2+2+2+2=8$

3. $3+3=6$

4. $5+5+5+5=20$

5. $2+2+2+2+2=10$

6. $2+2=4$

7. $4+4+4=12$

8. $4+4+4+4+4=20$

9. $3+3+3+3=12$


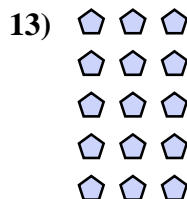
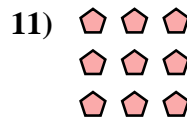
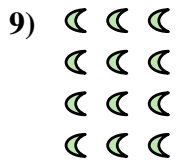



10. $5+5=10$

11. $3+3+3=9$

12. $5+5+5=15$

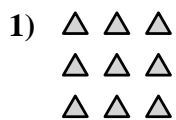
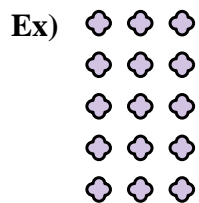
13. $3+3+3+3+3=15$

14. $4+4+4+4=16$





Write each array as an addition problem and solve.





Answers

Ex. 3+3+3+3+3=15

1. _____

2. _____

3. _____




4. _____

5. _____

6. _____

7. _____



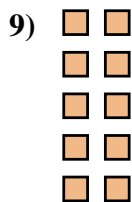


8. _____

9. _____

10. _____

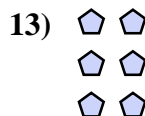

11. _____



12. _____

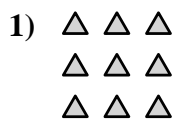
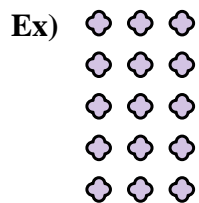
13. _____

14. _____





Write each array as an addition problem and solve.



Answers

Ex. $3+3+3+3+3=15$

1. $3+3+3=9$

2. $3+3=6$

3. $2+2+2+2=8$

4. $4+4+4+4=16$

5. $4+4+4=12$

6. $4+4=8$

7. $5+5+5+5+5=25$

8. $4+4+4+4+4=20$

9. $2+2+2+2+2=10$

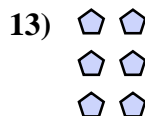

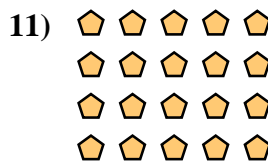

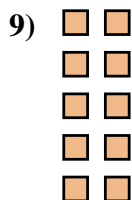



10. $5+5+5=15$

11. $5+5+5+5=20$

12. $2+2=4$

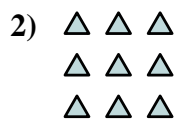
13. $2+2+2=6$

14. $3+3+3+3=12$





Write each array as an addition problem and solve.



Answers

Ex. $2+2=4$

1. _____

2. _____

3. _____

4. _____

5. _____

6. _____

7. _____

8. _____

9. _____


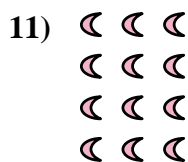






10. _____

11. _____

12. _____

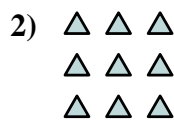

13. _____

14. _____





Write each array as an addition problem and solve.



Answers

Ex. 2+2=4

1. 2+2+2+2+2=10

2. 3+3+3=9

3. 3+3=6

4. 4+4+4=12

5. 2+2+2+2=8

6. 4+4+4+4+4=20

7. 5+5+5=15

8. 3+3+3+3+3=15

9. 5+5=10


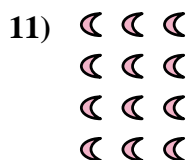






10. 2+2+2=6

11. 3+3+3+3=12

12. 5+5+5+5=20


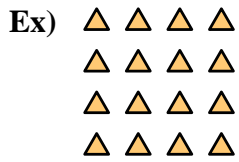
13. 4+4+4+4=16

14. 4+4=8





Write each array as an addition problem and solve.



Answers

Ex. 4+4+4+4=16

1. _____

2. _____

3. _____

4. _____

5. _____

6. _____

7. _____

8. _____

9. _____



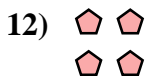


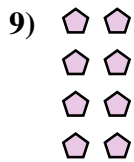


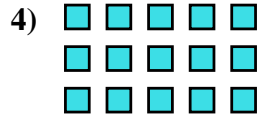
10. _____

11. _____

12. _____


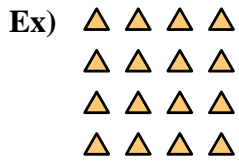
13. _____

14. _____





Write each array as an addition problem and solve.



Answers

Ex. 4+4+4+4=16

1. 4+4=8

2. 2+2+2+2+2=10

3. 4+4+4=12

4. 5+5+5=15

5. 3+3=6

6. 5+5+5+5=20

7. 3+3+3+3+3=15

8. 5+5=10

9. 2+2+2+2=8



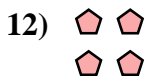


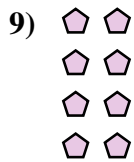


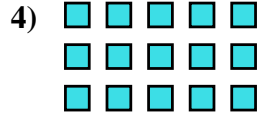
10. 3+3+3+3=12

11. 3+3+3=9

12. 2+2=4

13. 2+2+2=6


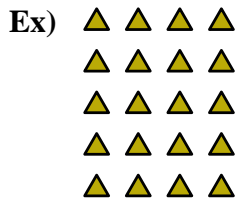
14. 4+4+4+4+4=20





Write each array as an addition problem and solve.

Answers



Ex. 4+4+4+4+4=20

1. _____

2. _____

3. _____

4. _____

5. _____

6. _____

7. _____

8. _____

9. _____

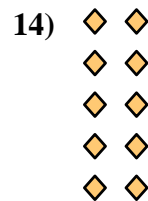
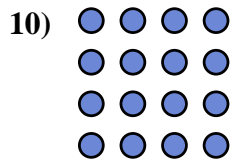
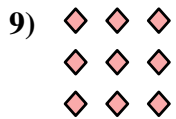
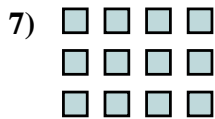
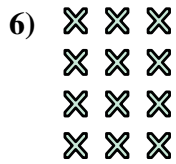
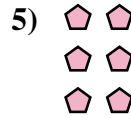

10. _____

11. _____

12. _____


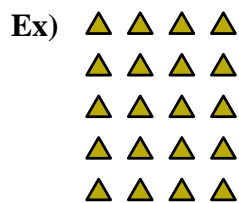
13. _____

14. _____





Write each array as an addition problem and solve.



Answers

Ex. $4+4+4+4+4=20$

1. $2+2+2+2=8$

2. $2+2=4$

3. $3+3+3+3+3=15$

4. $5+5+5+5+5=25$

5. $2+2+2=6$

6. $3+3+3+3=12$

7. $4+4+4=12$

8. $3+3=6$

9. $3+3+3=9$

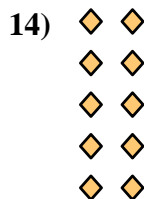
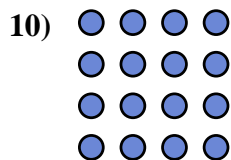
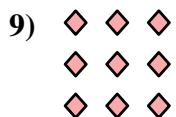
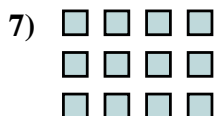
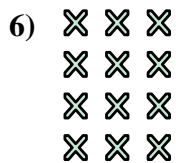
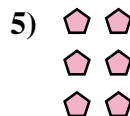


10. $4+4+4+4=16$

11. $5+5=10$

12. $5+5+5=15$

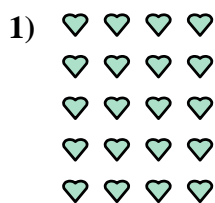

13. $5+5+5+5=20$

14. $2+2+2+2+2=10$





Write each array as an addition problem and solve.



Answers

Ex. $4+4+4+4=16$

1. _____

2. _____

3. _____

4. _____

5. _____

6. _____

7. _____

8. _____

9. _____



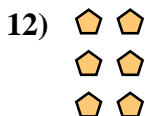

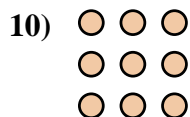
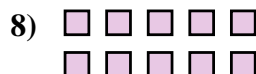
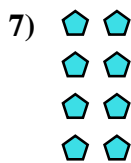

10. _____

11. _____

12. _____

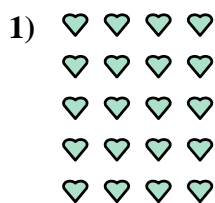

13. _____

14. _____





Write each array as an addition problem and solve.



Answers

Ex. 4+4+4+4=16

1. 4+4+4+4+4=20

2. 5+5+5+5=20

3. 3+3=6

4. 3+3+3+3=12

5. 5+5+5+5+5=25

6. 2+2=4

7. 2+2+2+2=8

8. 5+5=10

9. 4+4=8



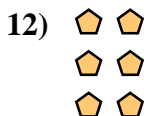

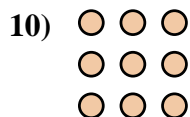
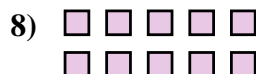
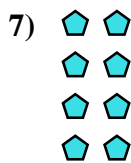


10. 3+3+3=9

11. 2+2+2+2+2=10

12. 2+2+2=6

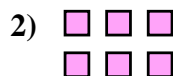
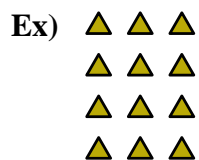
13. 3+3+3+3+3=15

14. 5+5+5=15





Write each array as an addition problem and solve.



Answers

Ex. $3+3+3+3=12$

1. _____

2. _____

3. _____

4. _____

5. _____

6. _____

7. _____

8. _____

9. _____

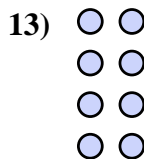
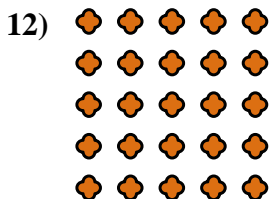

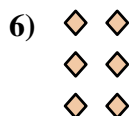

10. _____

11. _____

12. _____

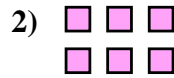
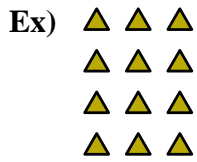
13. _____

14. _____





Write each array as an addition problem and solve.



Answers

Ex. 3+3+3+3=12

1. 3+3+3=9

2. 3+3=6

3. 2+2=4

4. 4+4+4+4+4=20

5. 5+5=10

6. 2+2+2=6

7. 2+2+2+2+2=10

8. 4+4+4+4=16

9. 3+3+3+3+3=15

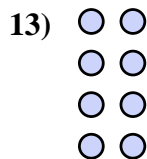
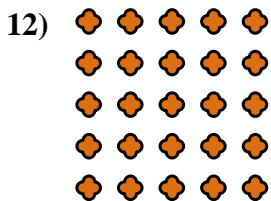
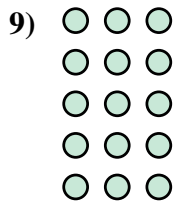
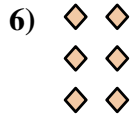
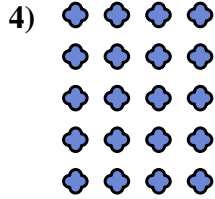
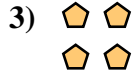
10. 5+5+5+5=20

11. 4+4=8

12. 5+5+5+5+5=25


13. 2+2+2+2=8

14. 5+5+5=15






Write each array as an addition problem and solve.



Answers

Ex. 4+4+4=12



1. _____

2. _____

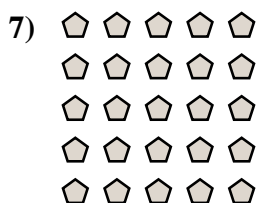
3. _____

4. _____

5. _____

6. _____

7. _____

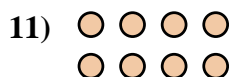

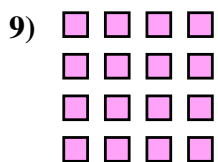


8. _____

9. _____

10. _____

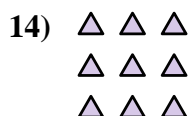

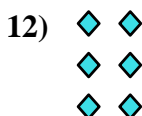
11. _____



12. _____


13. _____

14. _____





Write each array as an addition problem and solve.



Answers

Ex. 4+4+4=12

1. 5+5=10

2. 5+5+5=15

3. 5+5+5+5=20

4. 3+3+3+3=12

5. 4+4+4+4+4=20

6. 3+3=6

7. 5+5+5+5+5=25

8. 2+2=4

9. 4+4+4+4=16

10. 3+3+3+3+3=15

11. 4+4=8

12. 2+2+2=6

13. 2+2+2+2=8

14. 3+3+3=9

